



Determine if the shapes shown are 'similar', 'congruent' or 'neither'.

Answers

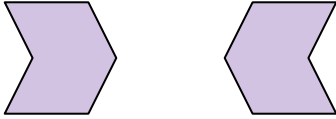
1)



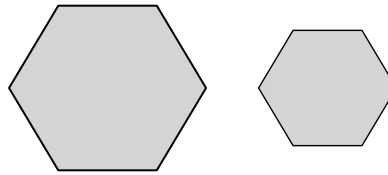
2)



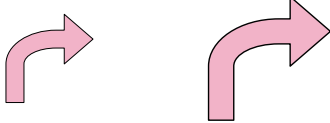
3)



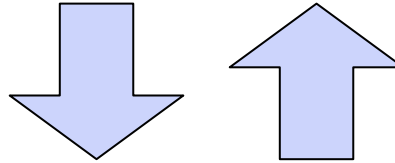
4)



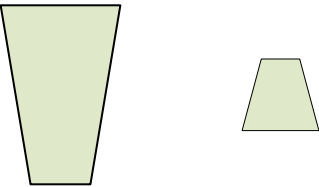
5)



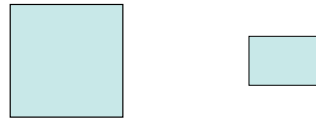
6)



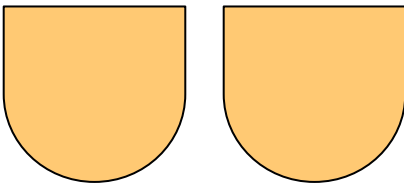
7)



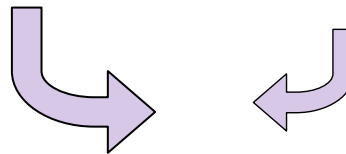
8)



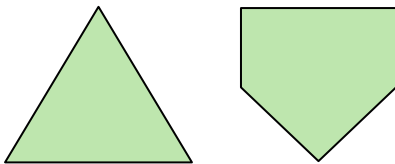
9)



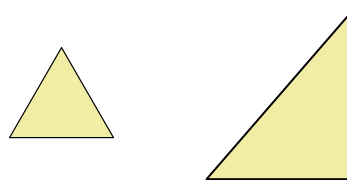
10)



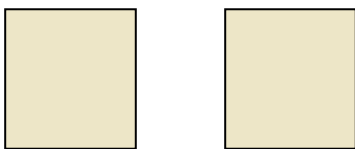
11)



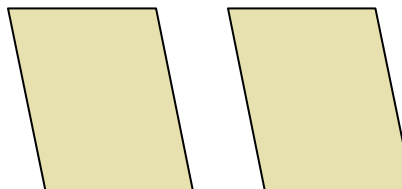
12)




13)




14)



15)



16)



1. _____

2. _____

3. _____

4. _____

5. _____

6. _____

7. _____

8. _____

9. _____

10. _____

11. _____

12. _____

13. _____

14. _____

15. _____

16. _____

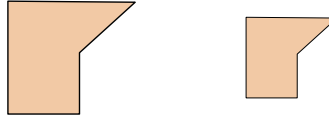


Determine if the shapes shown are 'similar', 'congruent' or 'neither'.

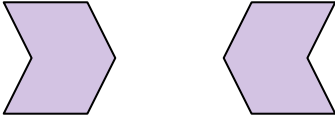
1)



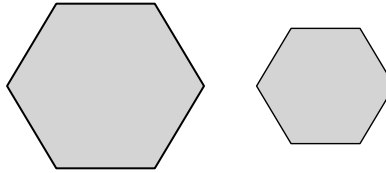
2)



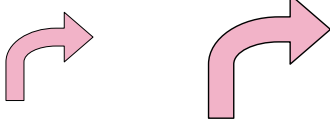
3)



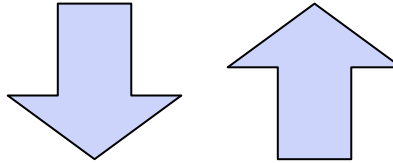
4)



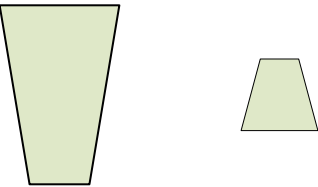
5)



6)



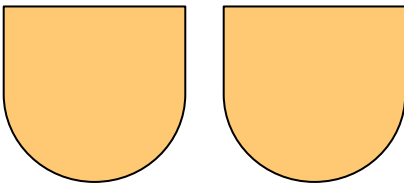
7)



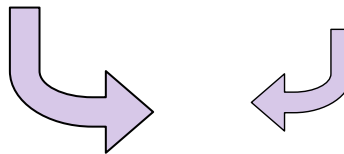
8)



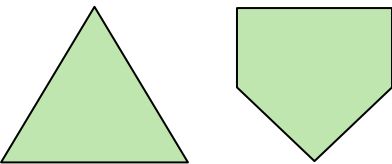
9)



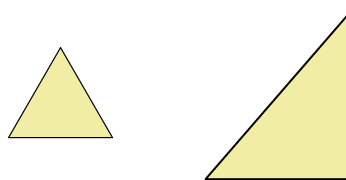
10)



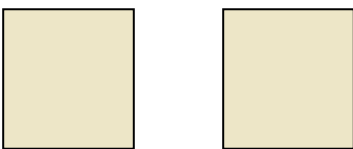
11)



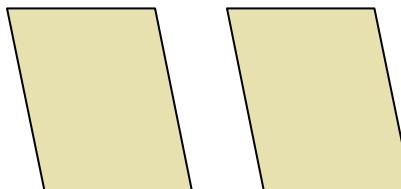
12)




13)




14)



15)



16)



Answers

1. similar

2. similar

3. congruent

4. similar

5. similar

6. congruent

7. neither

8. neither

9. congruent

10. similar

11. neither

12. neither

13. congruent

14. congruent

15. neither

16. neither



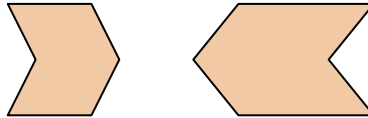
Determine if the shapes shown are 'similar', 'congruent' or 'neither'.

Answers

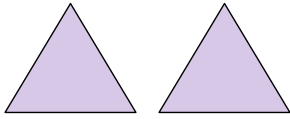
1)



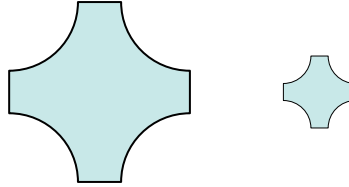
2)




3)



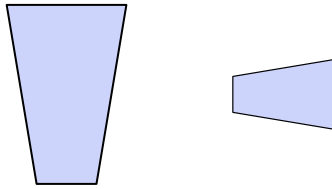
4)




5)



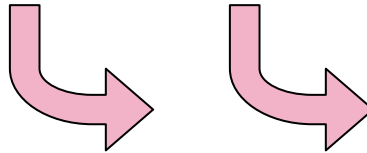
6)



7)



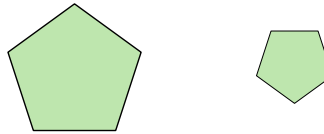
8)




9)



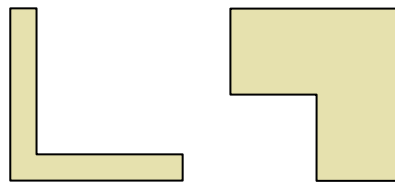
10)




11)



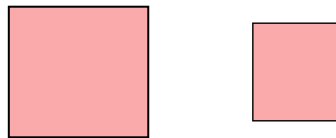
12)



13)



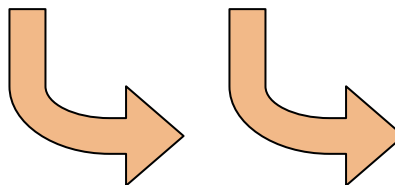
14)



15)



16)



1. _____

2. _____

3. _____

4. _____

5. _____

6. _____

7. _____

8. _____

9. _____

10. _____

11. _____

12. _____

13. _____

14. _____

15. _____

16. _____

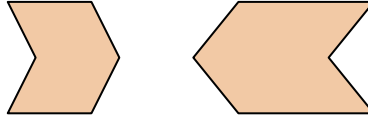


Determine if the shapes shown are 'similar', 'congruent' or 'neither'.

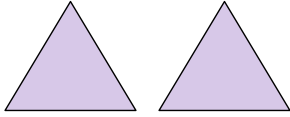
1)



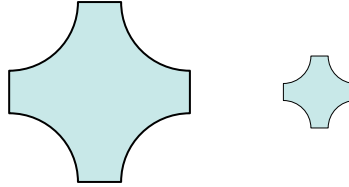
2)




3)



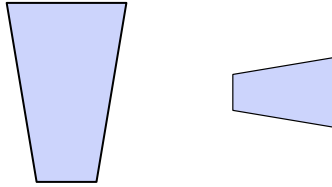
4)




5)



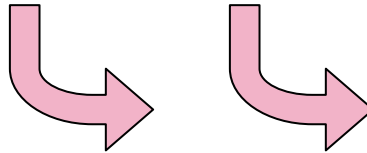
6)



7)



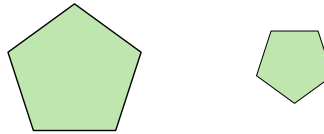
8)



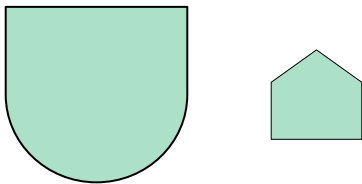
9)



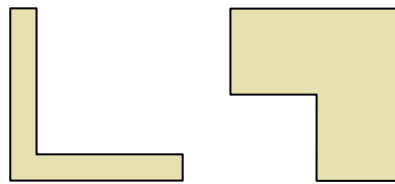
10)




11)



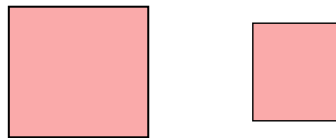
12)



13)



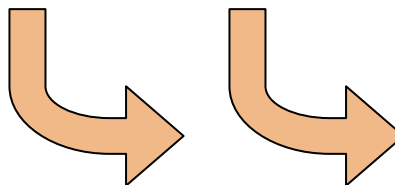
14)



15)



16)



Answers

1. congruent

2. neither

3. congruent

4. similar

5. neither

6. similar

7. congruent

8. congruent

9. neither

10. similar

11. neither

12. neither

13. similar

14. similar

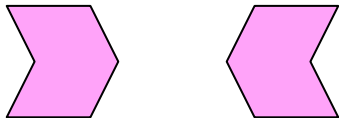
15. neither

16. congruent

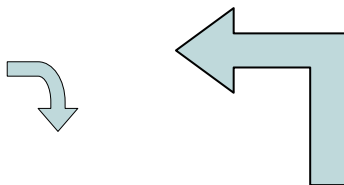


Determine if the shapes shown are 'similar', 'congruent' or 'neither'.

1)



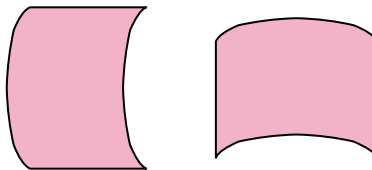
2)



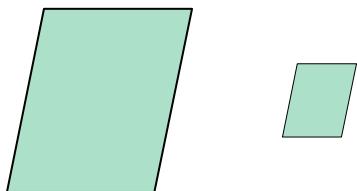
3)



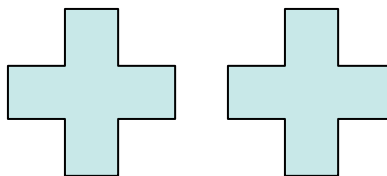
4)



5)



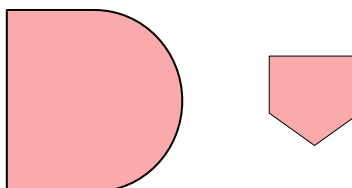
6)



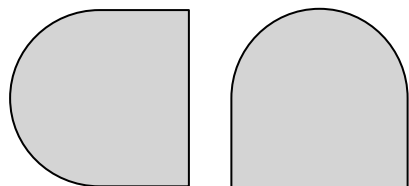
7)



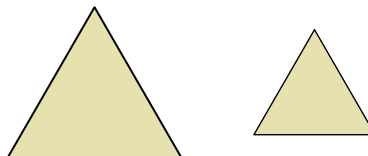
8)



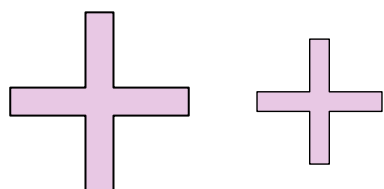
9)



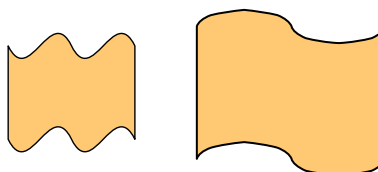
10)



11)



12)



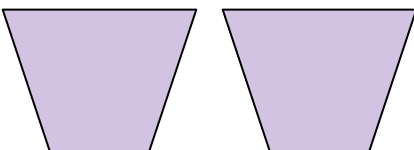
13)



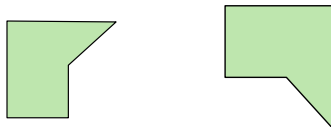
14)



15)



16)



Answers

1. _____

2. _____

3. _____

4. _____

5. _____

6. _____

7. _____

8. _____

9. _____

10. _____

11. _____

12. _____

13. _____

14. _____

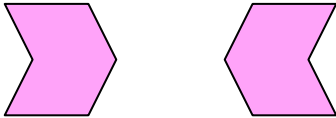
15. _____

16. _____

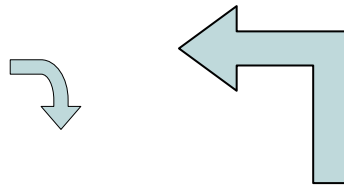


Determine if the shapes shown are 'similar', 'congruent' or 'neither'.

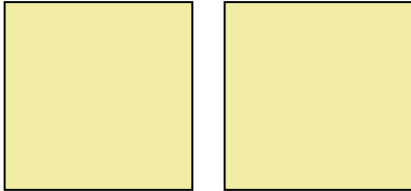
1)



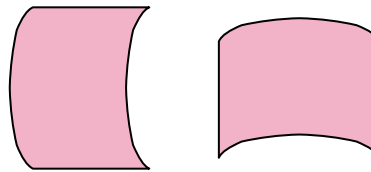
2)



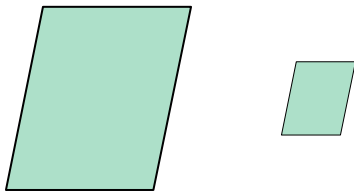
3)



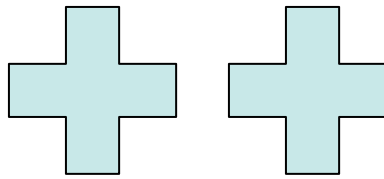
4)



5)



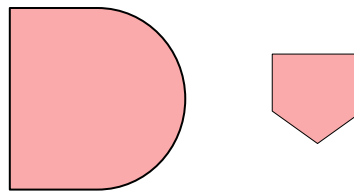
6)



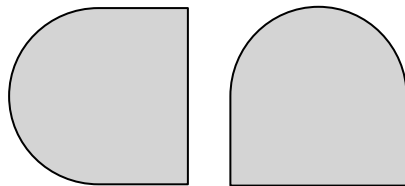
7)



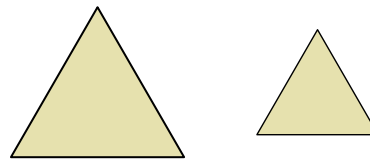
8)



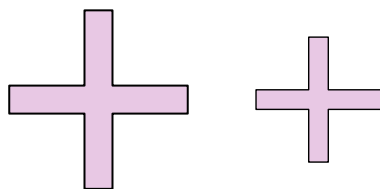
9)



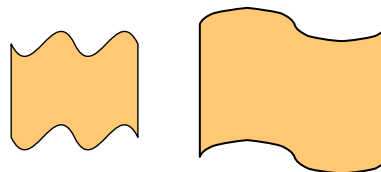
10)



11)



12)



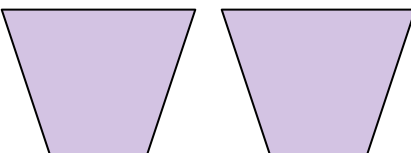
13)



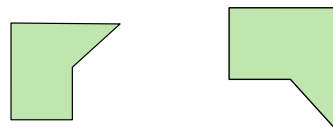
14)



15)



16)



Answers

1. congruent

2. neither

3. congruent

4. congruent

5. similar

6. congruent

7. similar

8. neither

9. congruent

10. similar

11. similar

12. neither

13. similar

14. neither

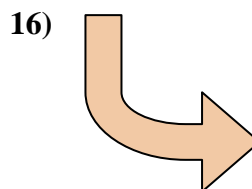
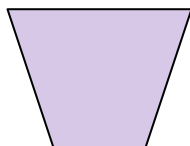
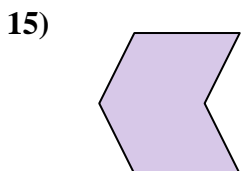
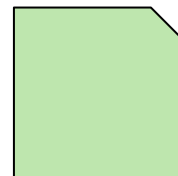
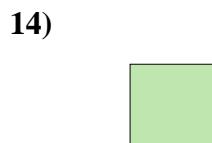
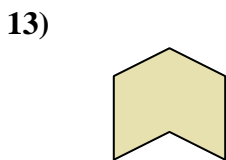
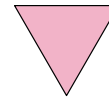
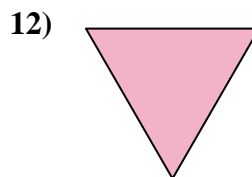
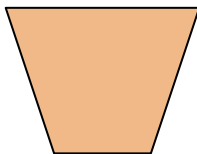
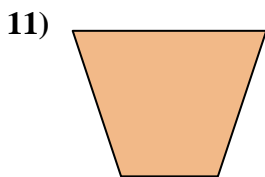
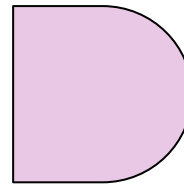
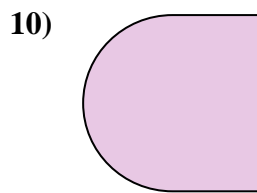
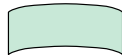
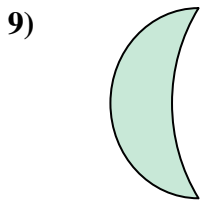
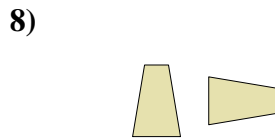
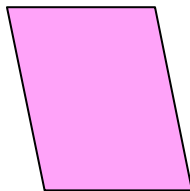
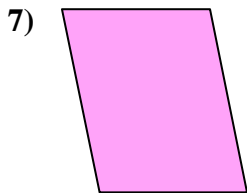

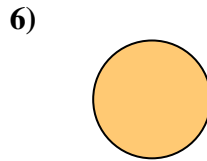
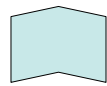
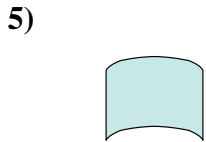
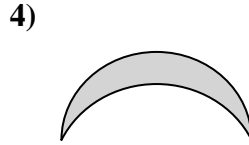
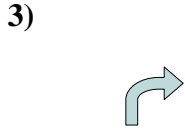
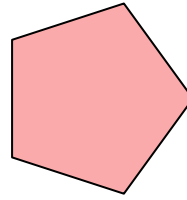
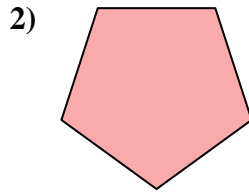
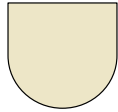
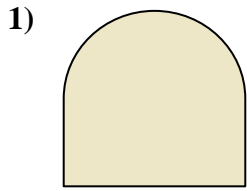
15. congruent

16. similar



Determine if the shapes shown are 'similar', 'congruent' or 'neither'.

Answers



1. _____

2. _____

3. _____

4. _____

5. _____

6. _____

7. _____

8. _____

9. _____

10. _____

11. _____

12. _____

13. _____

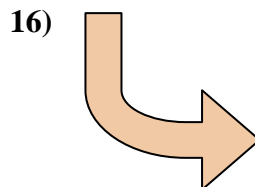
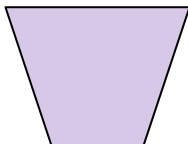
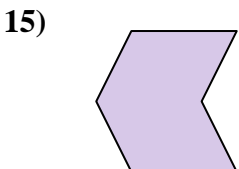
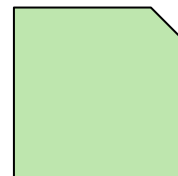
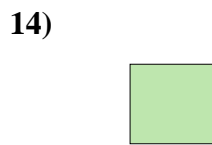
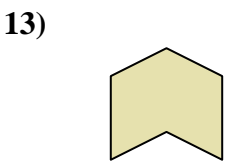
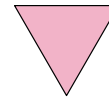
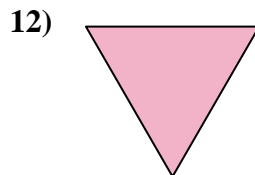
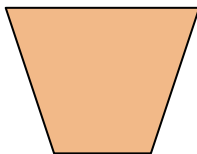
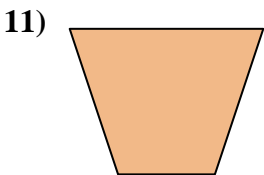
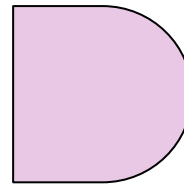
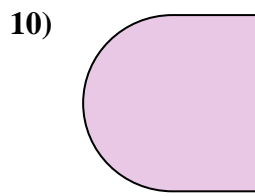
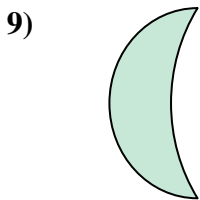
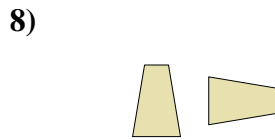
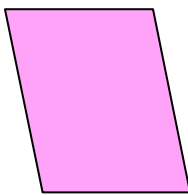
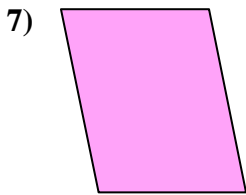

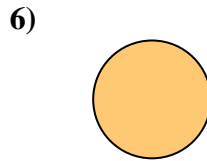
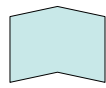
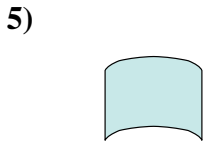
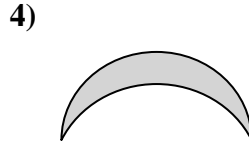
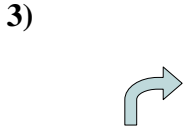
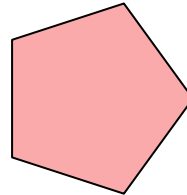
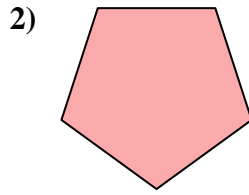

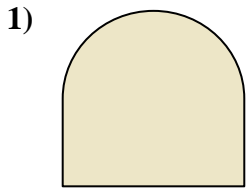
14. _____

15. _____

16. _____



Determine if the shapes shown are 'similar', 'congruent' or 'neither'.



Answers

1. similar

2. congruent

3. similar

4. similar

5. neither

6. congruent

7. congruent

8. congruent

9. neither

10. congruent

11. congruent

12. similar

13. neither

14. neither

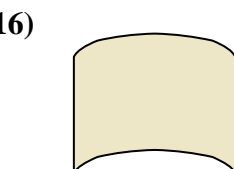
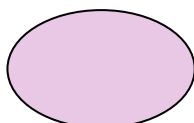
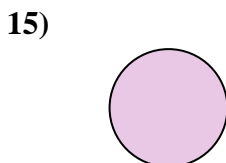
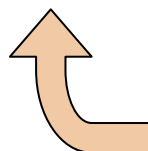
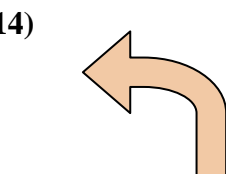


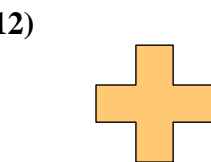
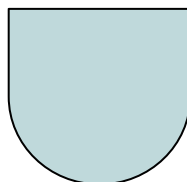
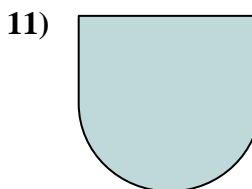
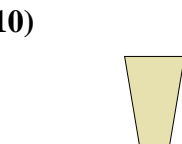
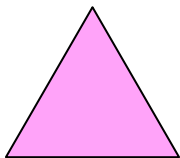
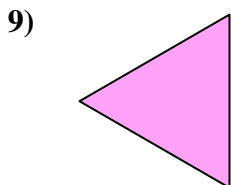
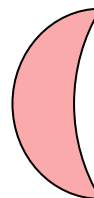
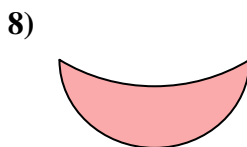
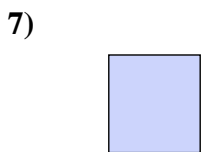
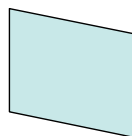
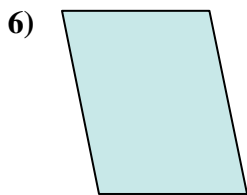


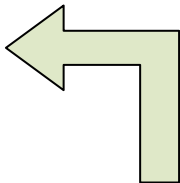
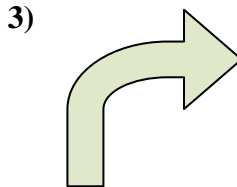
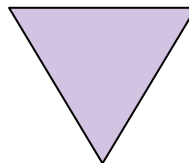
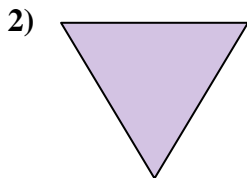
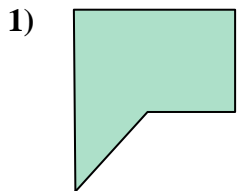
15. neither

16. similar



Determine if the shapes shown are 'similar', 'congruent' or 'neither'.

Answers



1. _____

2. _____

3. _____

4. _____

5. _____

6. _____

7. _____

8. _____

9. _____

10. _____

11. _____

12. _____

13. _____

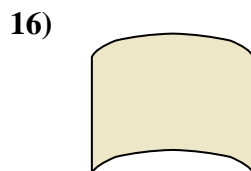
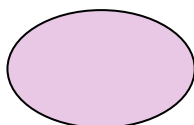
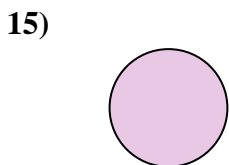
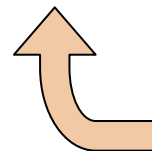
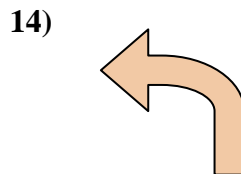

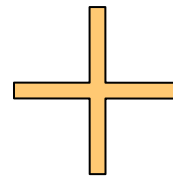
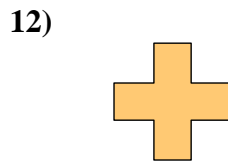
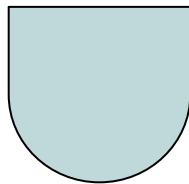
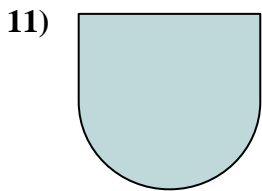
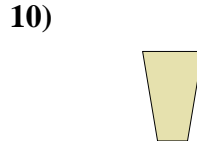
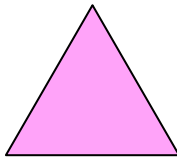
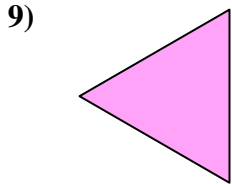
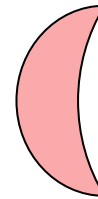
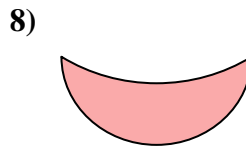
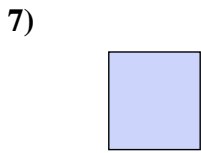
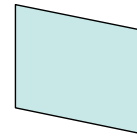
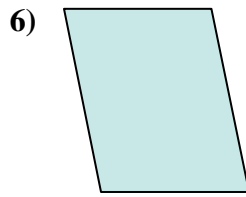
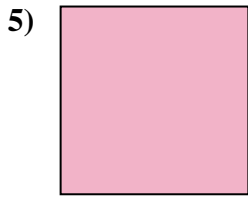
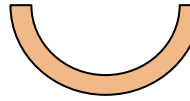
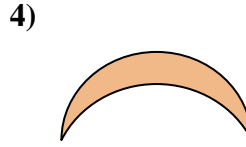
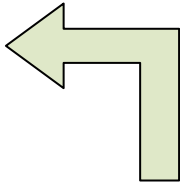
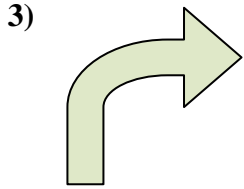
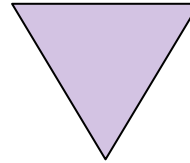
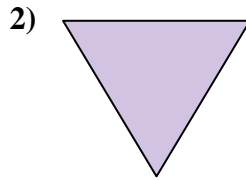
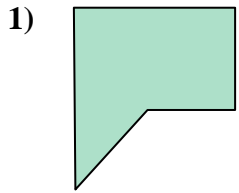
14. _____

15. _____

16. _____



Determine if the shapes shown are 'similar', 'congruent' or 'neither'.



Answers

1. similar

2. congruent

3. neither

4. neither

5. similar

6. similar

7. similar

8. congruent

9. congruent

10. similar

11. congruent

12. neither

13. similar

14. congruent

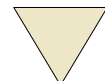
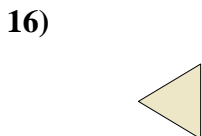
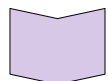
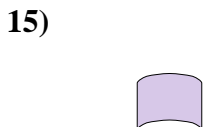

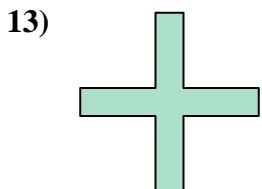

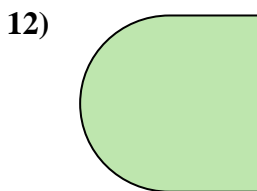

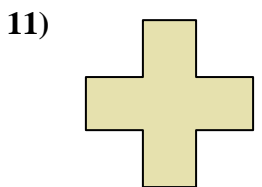
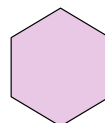
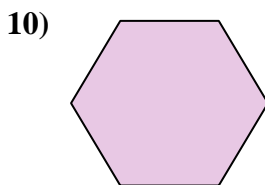




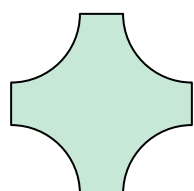
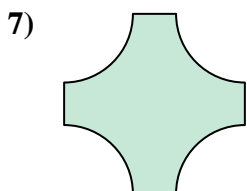
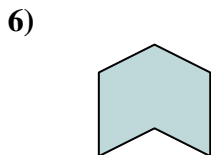
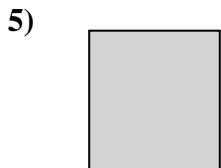
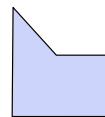
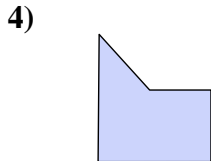


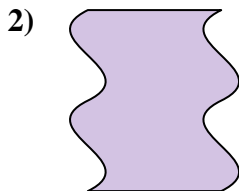
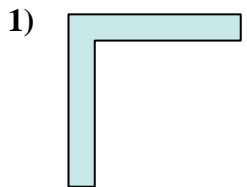
15. neither

16. neither



Determine if the shapes shown are 'similar', 'congruent' or 'neither'.

Answers



1. _____

2. _____

3. _____

4. _____

5. _____

6. _____

7. _____

8. _____

9. _____

10. _____

11. _____

12. _____

13. _____

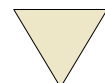
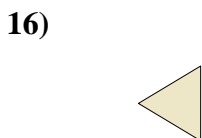
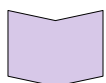
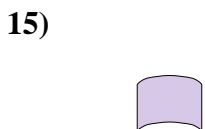

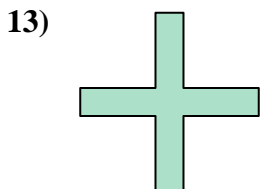

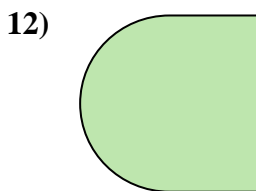

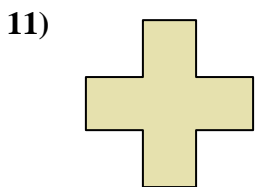
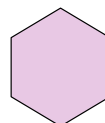
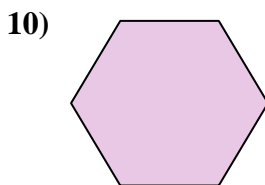



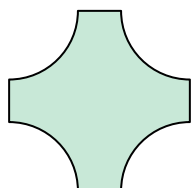
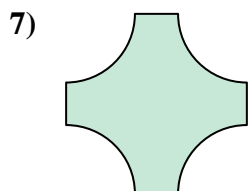
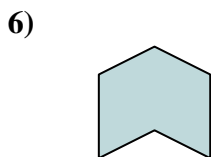
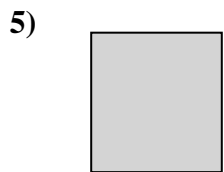
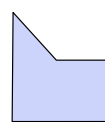
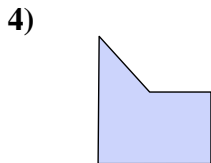


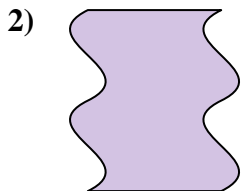
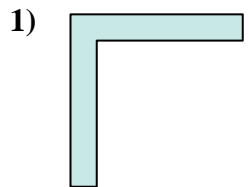
14. _____

15. _____

16. _____



Determine if the shapes shown are 'similar', 'congruent' or 'neither'.



Answers

1. similar

2. neither

3. congruent

4. similar

5. similar

6. congruent

7. congruent

8. congruent

9. neither

10. similar

11. similar

12. neither

13. congruent

14. neither

15. neither

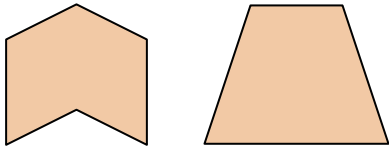
16. similar



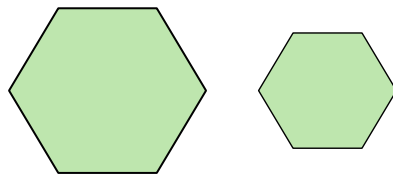
Determine if the shapes shown are 'similar', 'congruent' or 'neither'.

Answers

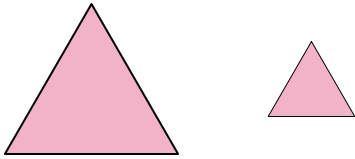
1)



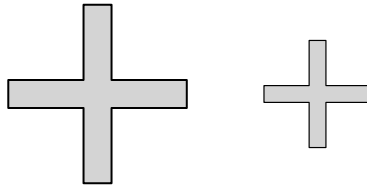
2)



3)



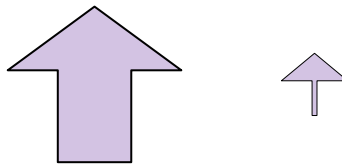
4)



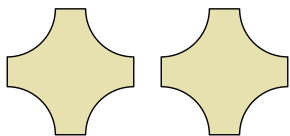
5)



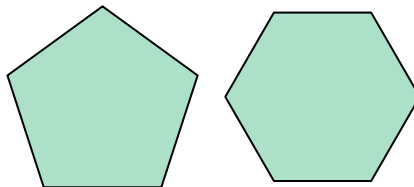
6)



7)



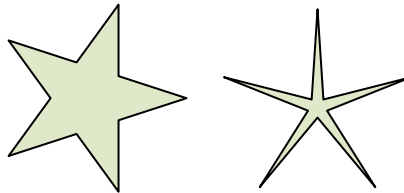
8)



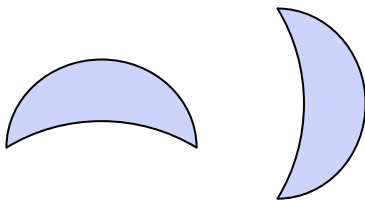
9)



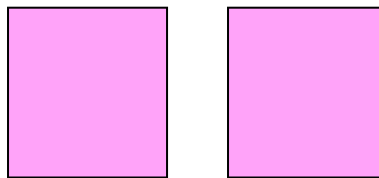
10)



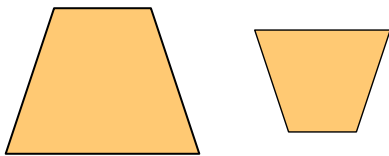
11)



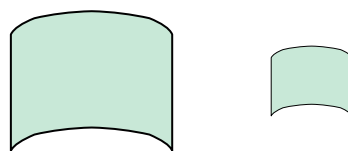
12)



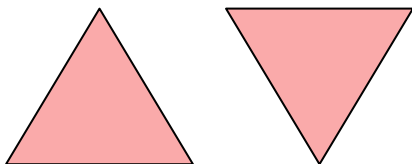
13)




14)



15)



16)



1. _____

2. _____

3. _____

4. _____

5. _____

6. _____

7. _____

8. _____

9. _____

10. _____

11. _____

12. _____

13. _____

14. _____

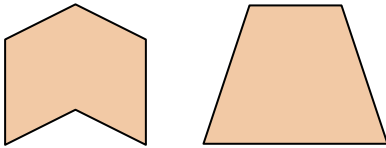
15. _____

16. _____

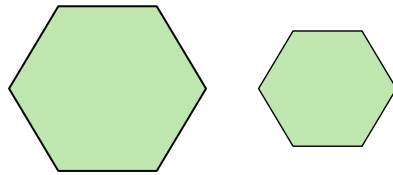


Determine if the shapes shown are 'similar', 'congruent' or 'neither'.

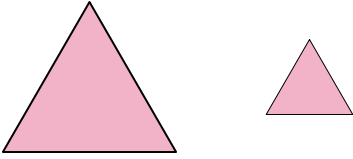
1)



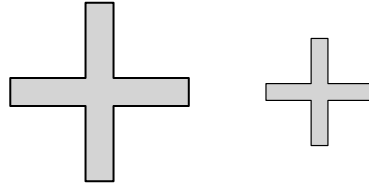
2)



3)



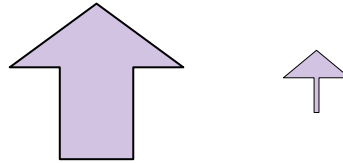
4)



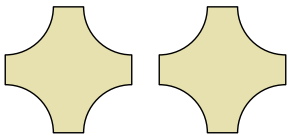
5)



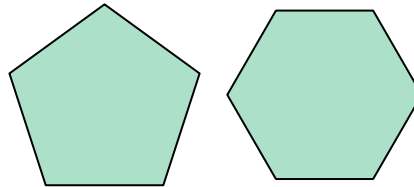
6)



7)



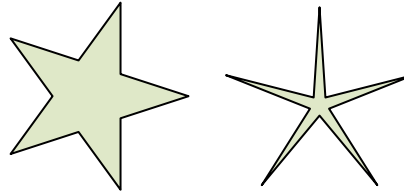
8)



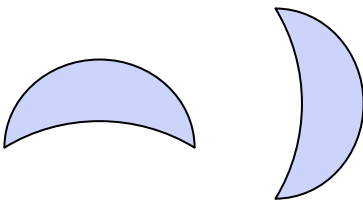
9)



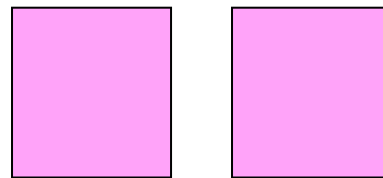
10)



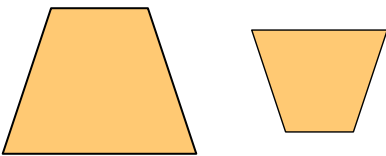
11)




12)



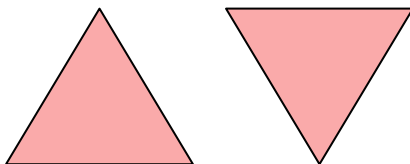
13)



14)



15)



16)



Answers

1. neither

2. similar

3. similar

4. similar

5. neither

6. neither

7. congruent

8. neither

9. congruent

10. neither

11. congruent

12. congruent

13. similar

14. similar

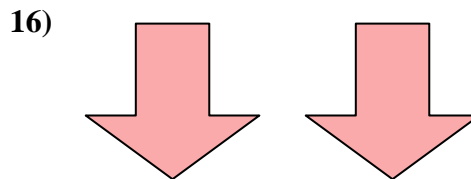

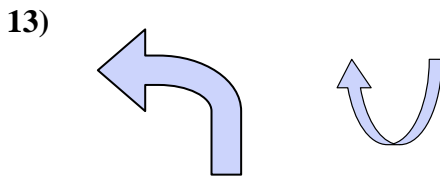
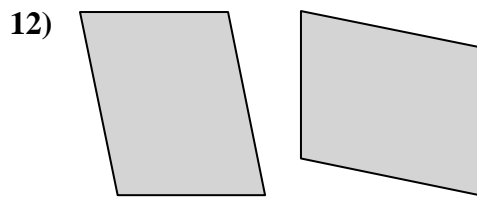
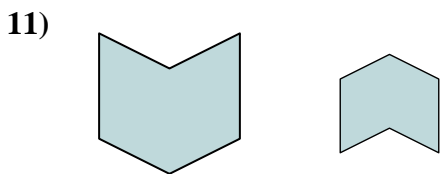
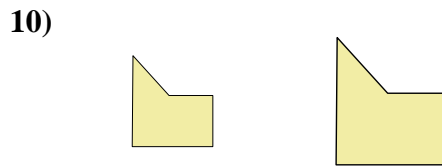
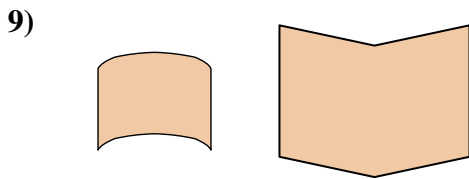
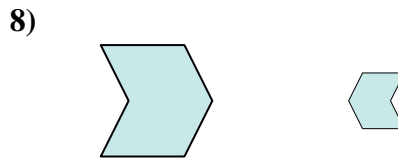
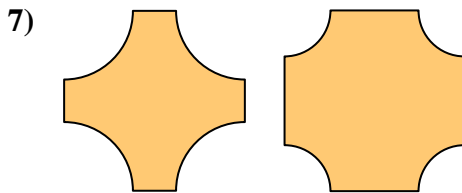
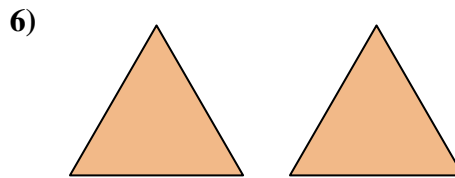
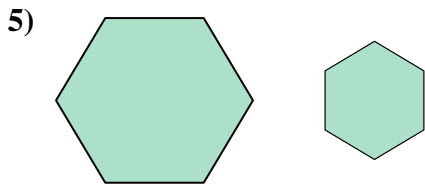


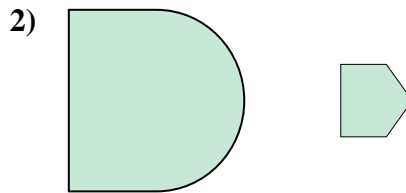
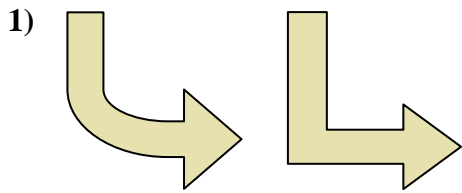
15. congruent

16. congruent



Determine if the shapes shown are 'similar', 'congruent' or 'neither'.

Answers



1. _____

2. _____

3. _____

4. _____

5. _____

6. _____

7. _____

8. _____

9. _____

10. _____

11. _____

12. _____

13. _____

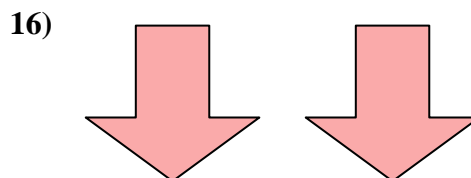
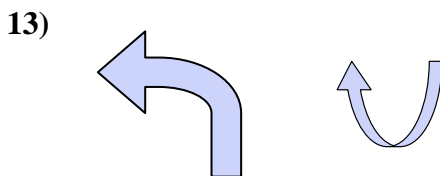
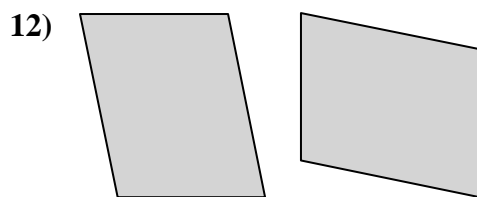
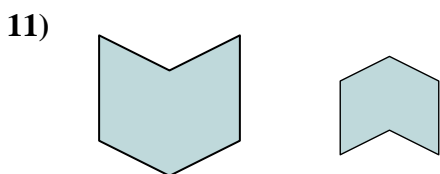
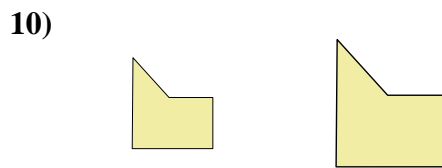
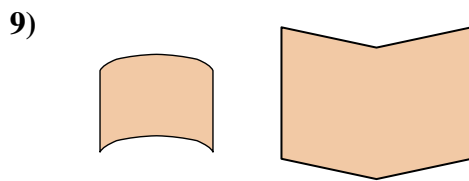
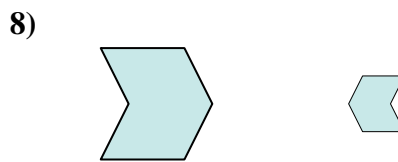
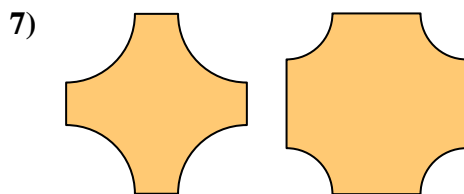
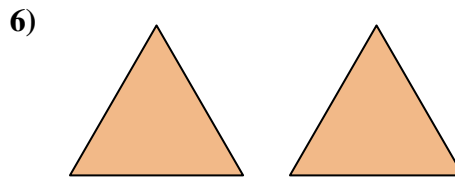
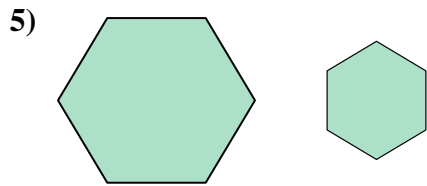


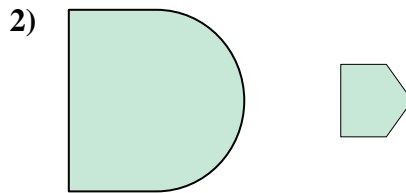
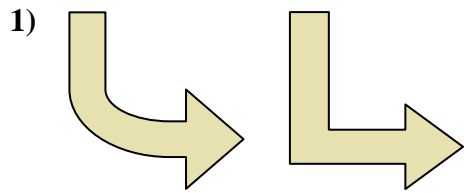
14. _____

15. _____

16. _____



Determine if the shapes shown are 'similar', 'congruent' or 'neither'.



Answers

1. neither

2. neither

3. congruent

4. congruent

5. similar

6. congruent

7. neither

8. similar

9. neither

10. similar

11. similar

12. congruent

13. neither

14. congruent

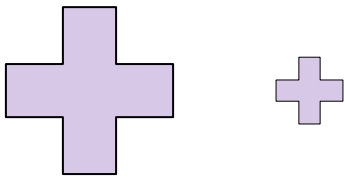
15. similar

16. congruent

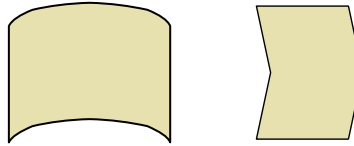


Determine if the shapes shown are 'similar', 'congruent' or 'neither'.

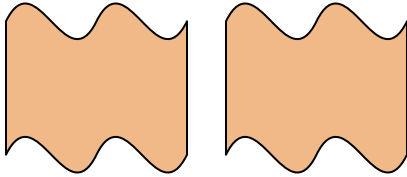
1)



2)



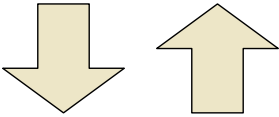
3)



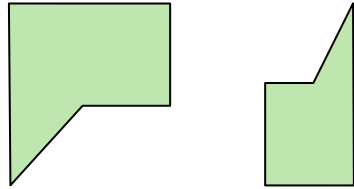
4)



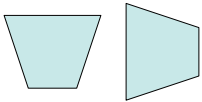
5)



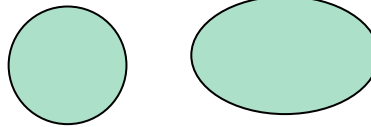
6)



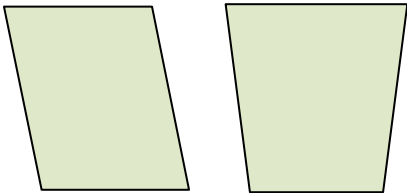
7)



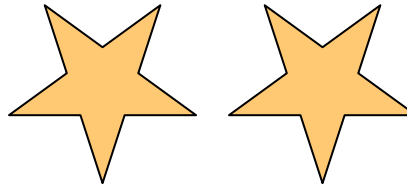
8)



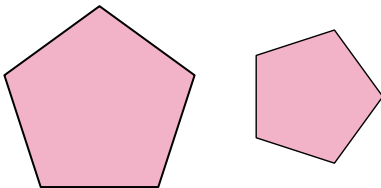
9)




10)



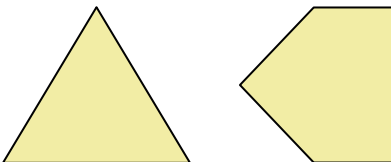
11)



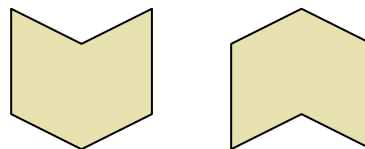
12)



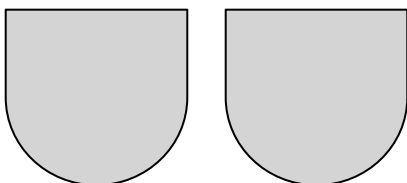
13)



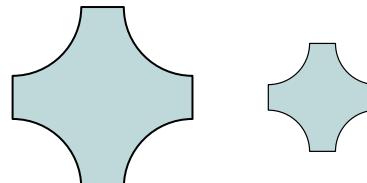
14)



15)



16)



Answers

1. _____

2. _____

3. _____

4. _____

5. _____

6. _____

7. _____

8. _____

9. _____

10. _____

11. _____

12. _____

13. _____

14. _____

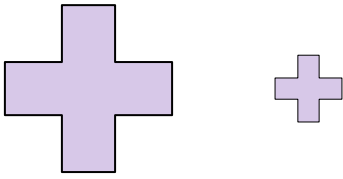
15. _____

16. _____

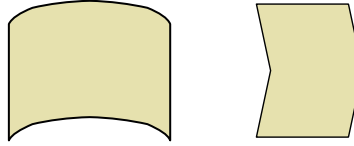


Determine if the shapes shown are 'similar', 'congruent' or 'neither'.

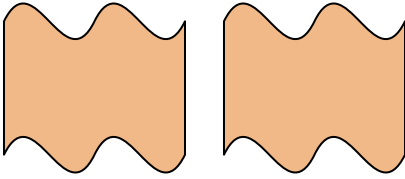
1)



2)



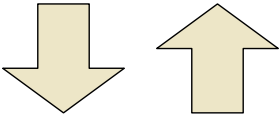
3)



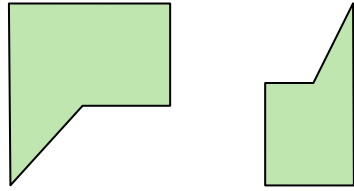
4)



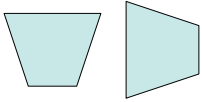
5)



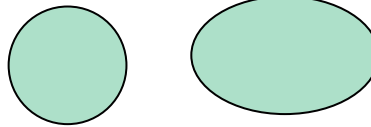
6)



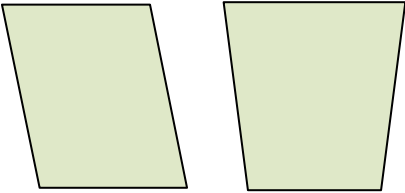
7)



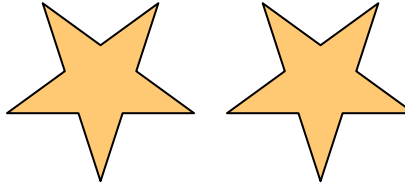
8)



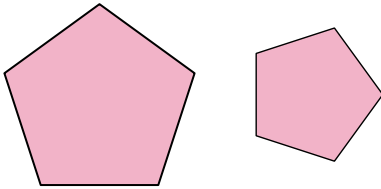
9)



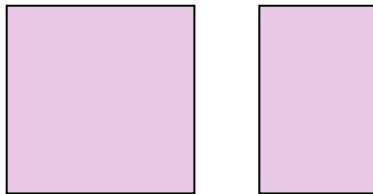
10)



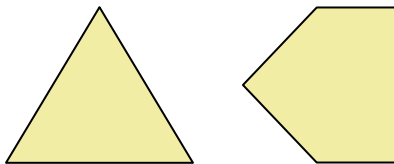
11)



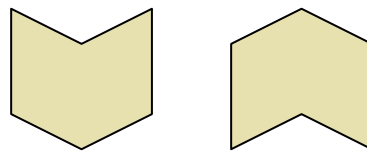
12)



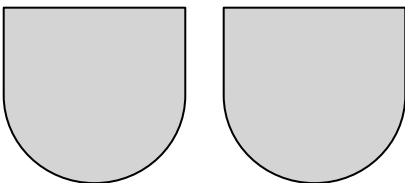
13)



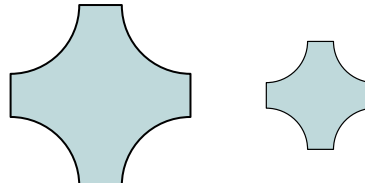
14)



15)



16)



Answers

1. similar

2. neither

3. congruent

4. similar

5. congruent

6. neither

7. congruent

8. neither

9. neither

10. congruent

11. similar

12. neither

13. neither

14. congruent

15. congruent

16. similar




Determine if the shapes shown are 'similar', 'congruent' or 'neither'.

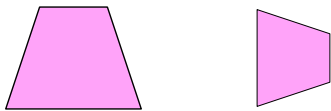
1)



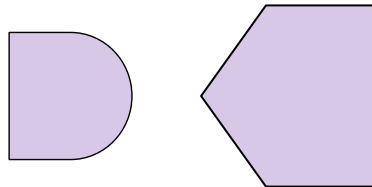
2)



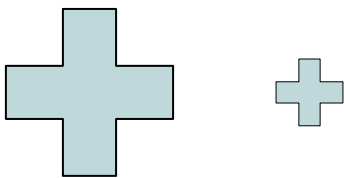
3)



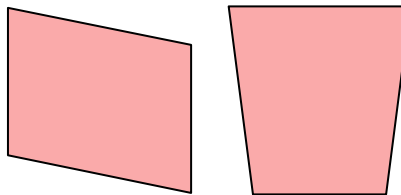
4)



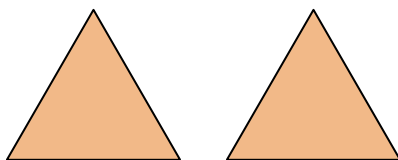
5)



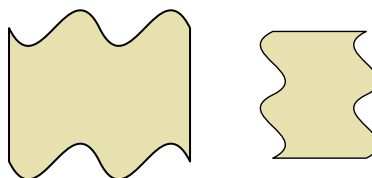
6)



7)



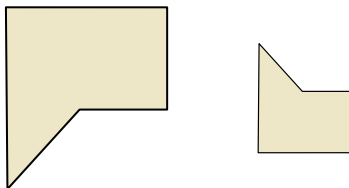
8)



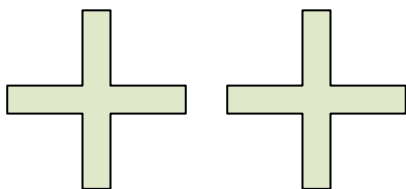
9)



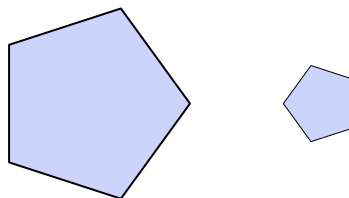
10)



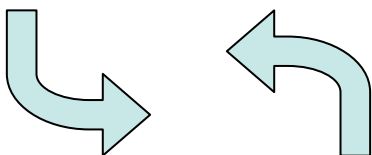
11)



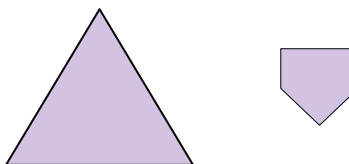
12)




13)



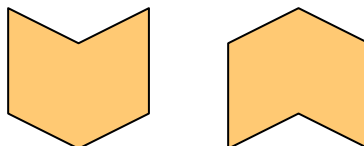
14)



15)



16)



Answers

1. _____

2. _____

3. _____

4. _____

5. _____

6. _____

7. _____

8. _____

9. _____

10. _____

11. _____

12. _____

13. _____

14. _____

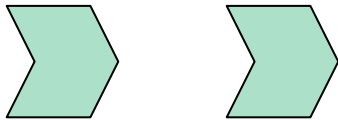
15. _____

16. _____




Determine if the shapes shown are 'similar', 'congruent' or 'neither'.

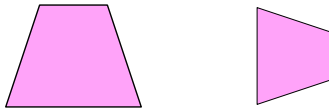
1)



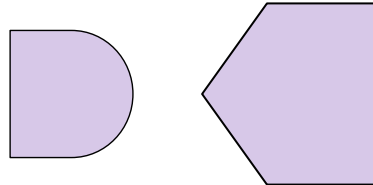
2)



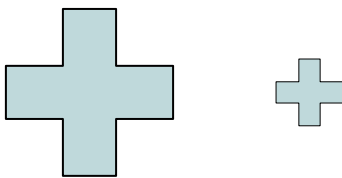
3)



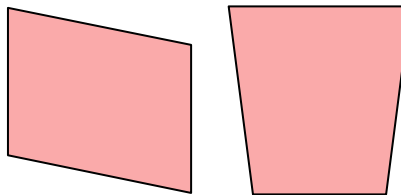
4)



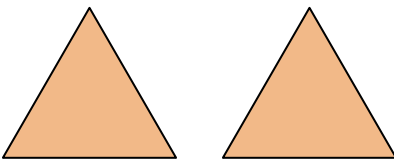
5)



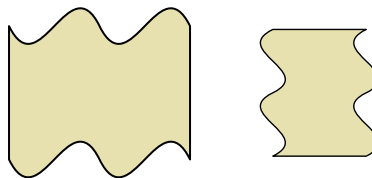
6)



7)



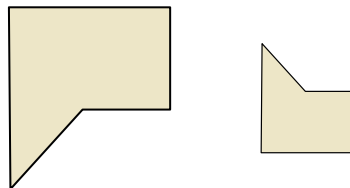
8)



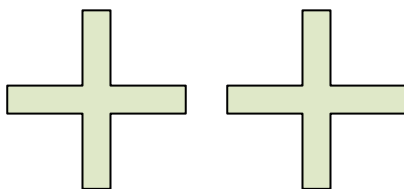
9)



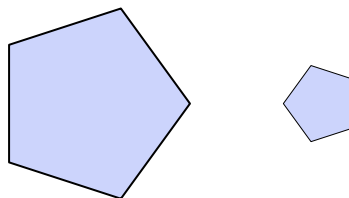
10)



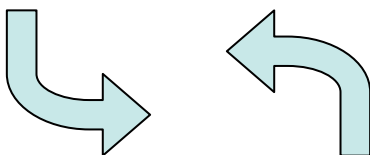
11)



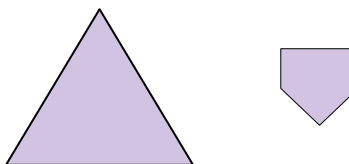
12)




13)



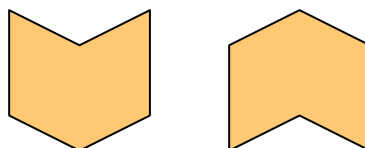
14)



15)



16)



Answers

1. congruent

2. neither

3. similar

4. neither

5. similar

6. neither

7. congruent

8. similar

9. similar

10. similar

11. congruent

12. similar

13. congruent

14. neither

15. neither

16. congruent